













# SHIFTING SHORELINES

STUDENT HANDOUT

Name: \_\_\_\_\_

Date: \_\_\_\_\_





## Shifting Shorelines

You have learned the causes of erosion near or around beaches, referred to as *coastal erosion*. Think about the different causes of coastal erosion. Write them here.

\_\_\_\_\_

\_\_\_\_\_

Draw an illustration in each box below to represent one of the causes. (tidal currents, winds, high waves, drainage)



Which one of the causes above might cause the most erosion over a short period of time? Why? Explain your thinking.

\_\_\_\_\_

\_\_\_\_\_

\_\_\_\_\_